



**Lesson 153**

- $71 - 6 =$
- There are 123 fish swimming in a lake. If 13 of the fish are caught, how many fish are left in the lake?  
\_\_\_\_\_ fish are left in the lake.
- $259 + 8 =$
- Write the number seven hundred two. \_\_\_\_\_
- Circle the greatest number. 156    173    123

**Lesson 154**

- Look at the Base Ten Blocks. Write the number shown.  
\_\_\_\_\_
- $81 - 18 =$
- $29 + 14 =$
- $51 - 17 =$
- Use the following clues to write a 3-digit number.



The digit in the tens place is 3.  
The digit in the hundreds place is greater than 5 and less than 7.  
The only remaining digit is a 0. What is the number?


The number is \_\_\_\_\_.

**Lesson 155**

1. What number comes right after 576?  
\_\_\_\_\_
2. Circle the even number that is least. 16   1   32   12   19
3.  $221 + 447 =$
4.  $84 - 41 =$
5.  $98 + 56 =$

**Lesson 156**

1.  $91 - 50 =$
2.  $550 + 24 =$
3. Ellie eats 19 strawberries and Emma eats 27 strawberries. How many more strawberries does Emma eat than Ellie?  
Emma eats \_\_\_\_\_ more strawberries than Ellie.
4.  $75 + 15 =$
5. In the box, draw Base Ten Blocks to show the number 703.



**Lesson 157**

1.  $61 - 12 =$
2.  $14 - 8 =$
3.  $717 - 111 =$
4. Write the number four hundred thirteen.  
\_\_\_\_\_

5. There are 16 students in Ms. Searcy's class and 22 students in Mr. Spencer's class. How many more students are in Mr. Spencer's class than Ms. Searcy's class?

There are \_\_\_\_\_ more students in Mr. Spencer's class than in Ms. Searcy's.

**Lesson 158**

1.  $18 - 4 =$
2.  $29 + 29 =$
3. It rains 9 days in May, 6 days in June, and 4 days in July. How many days does it rain during May and July?

It rains \_\_\_\_\_ days during May and July.

4. Write the number three hundred sixty.  
\_\_\_\_\_
5. Use the following clues to write a 3-digit number.

The three digits in this number are 6, 5, and 2.

The digit in the ones place is greater than 1, but less than 4.

The largest digit belongs in the tens place. What is the number?

The number is \_\_\_\_\_.

**Lesson 159**

- $162 + 17 =$
- $700 - 300 =$
- What is the value of the 5 in the number 564?

\_\_\_\_\_

- Write the number one hundred one.

\_\_\_\_\_

- A total of 74 people order vegetable soup at the deli. A total of 51 people order chili at the deli. How many more people order vegetable soup than chili?

\_\_\_\_\_ more people order vegetable soup than chili.

**Lesson 160**

- $28 + 6 =$
- Jackie jumps rope for 31 minutes Saturday and 27 minutes Sunday. How many more minutes does Jackie jump rope on Saturday than on Sunday?

Jackie jumps rope \_\_\_\_\_ more minutes on Saturday than on Sunday.

- $200 + 650 =$

- $9 + 14 =$

- Look at the Base Ten Blocks. Write the number shown.

\_\_\_\_\_

